

# MONDAY



- The time is twenty to
- $0.3 + 0.4 =$
- $17 \div 6 =$  r
- $\frac{1}{10} = 0.1$  or  $1$ ?
- How many days are in a leap year?
- Draw a mirror image.
- |   |
|---|
| 5 |
| 4 |
| X |

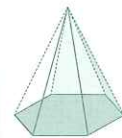
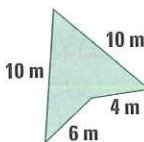
5
2
10

5
1
5

 X should be
- Write a factor of 12 (besides 1, 2 or 12).
- $3\frac{1}{2} L =$  mL
- $600 - 60 =$
- Perimeter = m
- $23 + 27 =$
- Name this shape.
- How many faces are on the above shape?
- Draw a  $\frac{1}{4}$  turn right.
- Write three thousand and thirty-three as a numeral.
- $0.5 = 5$  ☐ true ☐ false
- $8 + 8 =$
- Take 8 away from 17 =
- |  |  |
|--|--|
|  |  |
|  |  |

 $\frac{1}{2} < \frac{2}{3}$ 


☐ less than ☐ greater than ☐ true ☐ false



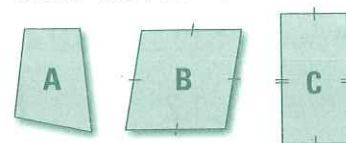
☐ less than  
☐ greater than



# TUESDAY




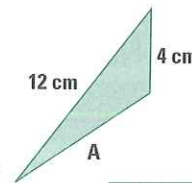
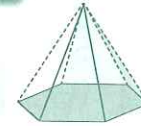
- What is the time?
- $3 + 2.5 =$
- 87, 81, 75,
- $620 + 180 =$
- The time is 8.20, what will the time be in 40 minutes?
- How many edges are on a square prism?
- How many weeks are in a year?
- $\frac{3}{10} = 0.03$  or  $0.3$ ?
- What position in the alphabet is the letter G?  
☐ 6th ☐ 7th ☐ 8th
- $0.8 + 0.2 =$
- 75 mm = cm
- Draw a mirror image (reflection).
- $3 \times 8 =$
- What is the difference between 12 and 7?
- Tick the direction from A to B.   
North-east ☐  
North-west ☐  
South-east ☐  
South-west ☐
- $4 \overline{)94} =$  r
- Write twelve point zero two as a numeral.
- $16 + 16 =$
- A heptagon has sides
- Circle the rhombus.



# WEDNESDAY



- The time is twenty to
- Will this shape tessellate?
- Name this 3-D shape.
- $9\frac{1}{2} \text{ km} =$  m
- $\frac{8}{10} = 0.8$  or  $8$ ?
- Marty the brickie began work at 7 am and finished at 4 pm. He lays 100 bricks each hour. If Marty had 15 minutes for morning tea, half an hour for lunch and a quarter of an hour for afternoon tea how many bricks did he lay for the day?
- $9 + 1.5 =$
- Write a factor of 33 (besides 1 or 33).
- What is the product of 4 and 8?
- If tomorrow is Monday, what day was yesterday?
- Write eighteen point three as a numeral.
- Round 862 (nearest 100).
- $47 + 9 =$
- Tally 18
- $15 - 9 =$
- If the perimeter = 21 cm  
Then Side A = cm
- Write as a fraction.
- $410 + 190 =$
- $2200 - 500 =$
- $3 \overline{)53} =$



# THURSDAY



- What is the time?
- $\$0.80 + \$0.20 =$
- Can 22 be divided by 4 equally?
- $IX - V$  (Roman numerals) =
- How many days are in January?
- 198, 188, 178,
- $9^2 =$
- If yesterday was Wednesday, what day will tomorrow be?
- Write the number sentence for 8 netball teams each with 7 players. How many players are there?  
x =
- $0.6 - 0.3 = 0.$
- Is Z symmetrical?
- Name this shape.
- mm = 7 m
- 1, 2, 3, 4, 6, , 12 are factors of 24.
- $\frac{1}{4} = \frac{3}{8}$  ☐ true ☐ false
- Mark where the right angle is located.
- Tick the direction from A to B.   
North-east ☐  
South-east ☐  
North-west ☐  
South-west ☐
- The letter J is in which position in the alphabet?  
☐ 8th ☐ 9th ☐ 10th
- $500 - 220 =$
- Double 35.

